

04 වසර

ඉංග්‍රීසි

ඒකක පරීක්ෂණ


අංක 11



A3book.com



01. Name these figures.




- A. rectangle B. square C. oval D. triangle E. circle



- A. rectangle B. square C. oval D. triangle E. circle



- A. rectangle B. square C. oval D. triangle E. circle



- A. rectangle B. square C. oval D. triangle E. circle



- A. rectangle B. square C. oval D. triangle E. circle

(1) Answer all questions.



- 1) A.skip B. catch C. jump D. run E. walk



- 2) A.skip B. catch C. jump D. run E. walk



- 3) A.skip B. catch C. jump D. run E. walk



- 4) A.skip B. catch C. jump D. run E. walk



- 5) A.skip B. catch C. jump D. run E. walk

04 වසර

ඉංග්‍රීසි

ඒකක පරීක්ෂණ

අංක 11


පිළිතුරු



A3book.com



01. Name these figures.




A. rectangle B. square C. oval D. triangle E. circle



A. rectangle B. square C. oval D. triangle E. circle



A. rectangle B. square C. oval D. triangle E. circle



A. rectangle B. square C. oval D. triangle E. circle



A. rectangle B. square C. oval D. triangle E. circle

(1) Answer all questions.



- 1) A.skip B. catch C. jump D. run E. walk



- 2) A.skip B. catch C. jump D. run E. walk



- 3) A.skip B. catch C. jump D. run E. walk



- 4) A.skip B. catch C. jump D. run E. walk



- 5) A.skip B. catch C. jump D. run E. walk

a3book.com