

04 වසර

ඉංග්‍රීසි

ඒකක පරීක්ෂණ

අංක 10




A3book.com



(01) Answer according to the price tags.

Eg : How much is this ruler? it's ten rupees.

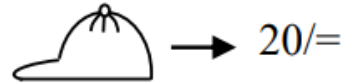
 → 10/=

1) How much is this cap?

It's rupees.

A. twenty five

B. fifteen



C. five

D. thirty

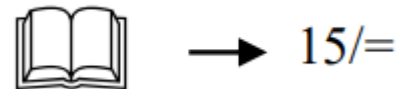
E. twenty

2) How much is this book?

It's rupees.

A. twenty five

B. fifteen



C. five

D. thirty

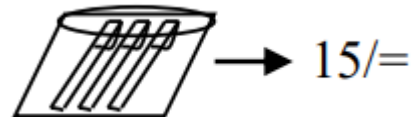
E. twenty

3) How much are these pens?

They are rupees.

A. twenty five

B. fifteen



C. five

D. thirty

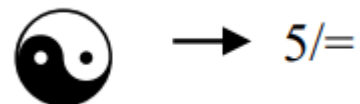
E. twenty

4) How much is this ball?

It's rupees.

A. twenty five

B. fifteen



C. five

D. thirty

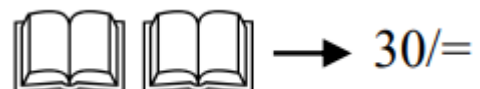
E. twenty

5) How much are these books?

They're rupees.

A. twenty five

B. fifteen



C. five

D. thirty

E. twenty

(2) Fill in the blanks according to the picture.

1) This a frock..

A. is



B. are

2) These frocks

A. is

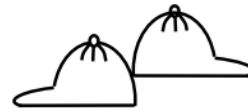
B. are



3) That a cap

A. is

B. are



4) Those caps.

A. is

B. are



5) Those books

A. is

B. are



04 වසර

ඉංග්‍රීසි

ඒකක පරීක්ෂණ

අංක 10

පිළිතුරු




A3book.com



(01) Answer according to the price tags.

Eg : How much is this ruler? it's ten rupees.


 → 10/=

1) How much is this cap?

It's rupees.

A. twenty five

B. fifteen

 → 20/=

C. five

D. thirty


E. twenty

2) How much is this book?

It's rupees.

A. twenty five

B. fifteen

 → 15/=

C. five

D. thirty


E. twenty

3) How much are these pens?

They are rupees.

A. twenty five

B. fifteen

 → 15/=

C. five

D. thirty


E. twenty

4) How much is this ball?

It's rupees.

A. twenty five

B. fifteen

 → 5/=

C. five

D. thirty


E. twenty

5) How much are these books?

They're rupees.

A. twenty five

B. fifteen

 → 30/=

C. five

D. thirty

E. twenty

(2) Fill in the blanks according to the picture.

1) This a frock..

A. is



B. are

2) These frocks

A. is

B. are



3) That a cap

A. is

B. are



4) Those caps.

A. is

B. are



5) Those books

A. is

B. are

